

## Egyptian Survey Puzzle 2

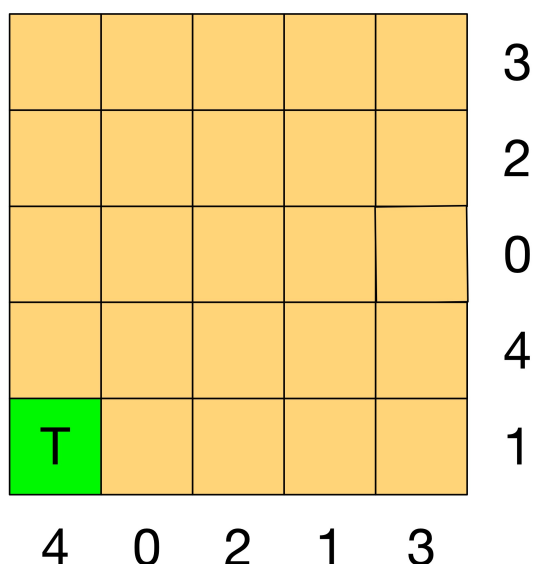
Old records show that this area of the desert contains the tombs of 1 scribe (a large tomb covering 3 squares), 3 artisans (medium, 2 squares) and 1 merchant (small, 1 square).

A survey has gathered information of where tombs could be. Each number tells you how many squares are part of a tomb in that row or column.


Tombs are not adjacent (horizontally, vertically or diagonally).

A trial dig in one corner found the tomb of an artisan (marked with a T).


Can you work out where all the tombs are without further digging?



Merchant's tomb x 1



Artisan's tomb x 3



Royal scribe's tomb x 1